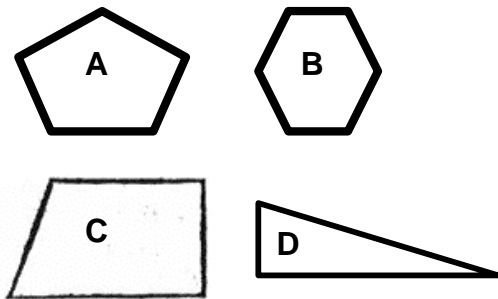


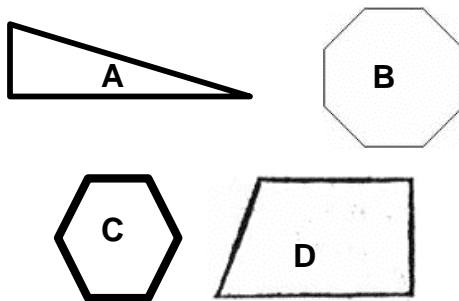
Math Live – Polygons: Activity Sheet

Grade: 3 Strand: Shape and Space (3-D Objects and 2-D Shapes) Outcome: 7

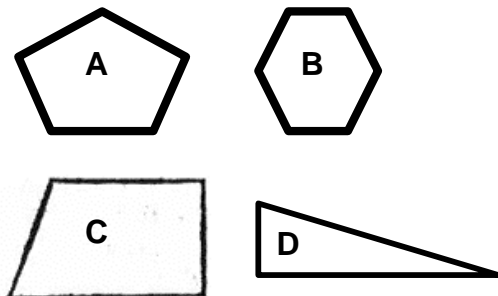
1. Which one of the following shapes is a **quadrilateral**? Explain why.



2. Which one of the following shapes is an **octagon**? Explain why.



3. Which one of the following shapes is a **pentagon**? Explain why.



Sketch and name each polygon described.

4. 5 equal sides

5. 8 equal sides

6. 3 equal sides

7. 4 equal sides

Math Live – *Polygons*: Activity Sheet Answer Key

1. C - it has 4 sides, angles, and vertices.
2. B - it has 8 sides, angles, and vertices.
3. A - it has 5 sides, angles, and vertices.
4. Closed figure with 5 equal sides. Pentagon.
5. Closed figure with 8 sides. Octagon.
6. Closed figure with 3 equal sides. Triangle.
7. Closed figure with 4 sides. Quadrilateral.